

Hi everyone!

I hope you are all well. Here is the work for the next two weeks. You have all done so well over the last few months and I am very proud of you all. I hope you have a wonderful, safe Summer. Looking forward to seeing you all in September.

Ms Madden

Week12 & 13 15/06/20-25/06/20	
Gaeilge	<u>Revision</u> - See sentences on next page. Translate (Use Irish dictionary) Can be done orally.
English	<u>Reading</u> – ‘Under the Hawthorn Tree’ p.84-89– (click on link below to open) Answer questions from p. 89 (can be done orally, or written into English copy) ‘The Long March’ p.90-96 (click on link below to open) Answer questions from p. 96 (can be done orally, or written into English copy) https://content.yudu.com/web/1yssw/0A224cw/Fireworks5Anthology/html/index.html?page=8&origin=reader Continue to read during the Summer holidays!
Maths	<u>Revision</u> - See pages below – answers in your Maths copy. <u>Tables</u> revision – online game below Here is the link for ‘hit the button’ https://www.topmarks.co.uk/maths-games/hit-the-button
SESE	<u>History</u> –Unit 19: Irish Women in Science/Unit 20: Communication Workbook p.45 & 46 Workbook chapter 20 -.p. 47 & 48 (do what you can) Useful websites: https://www.siliconrepublic.com/discovery/irelands-greatest-woman-inventor-finalist-alicia-boole-stott-imagining-in-four-dimensions Information about Ireland’s greatest female inventors <u>Geography/Science</u> –Unit 20 Outer Space/Unit 21: Environmental Awareness & Care Workbook p.45 & 46 Workbook chapter 21- p.47 & 48 (do what you can) https://www.nasa.gov/kidsclub/index.html NASA’s Kids’ Club website

Aistrigh na habairtí seo go Béarla.

1. Cad atá cearr leat anois?

2. Nílím ar fónamh, a mhúinteoir.

3. Bhí an scrúdú ar siúl i lár na cathrach.

4. An oíche sin, bhí an teilifís ar siúl.

5. Bhuail an tiománaí na coscáin ar an Luas.

6. Thosaigh mo shrón ag cur fola.

7. Ghoid an maistín mo lón freisin.

8. D'inis an príomhoide an scéal do na tuismitheoirí.

9. Téigh isteach sa halla agus suigh síos.

10. Bhí ionadh an domhain ar gach duine.

SCÓR: /10 %

Aistrigh na habairtí seo go Gaeilge.

1. After a while, the librarian **called** the guards.

2. The guard **sat** in front of the television at half past nine.

3. The next day, the teacher **gave** a maths test to the children.

4. Suddenly the car **stopped** at the traffic lights.

5. Lunchtime **was** over and the school bell **rang**.

6. Dónal **was** shaking with fear and he **started** to cry.

7. Just then the principal **sent for** the parents.

8. The bully **tore** the copybook in the classroom yesterday.

9. Bríd and her friends **went** out walking on the mountain.

10. The king **jumped** off the horse and he **saw** the castle.

SCÓR: /10 %

1. Find the sum of these three numbers: 876, 74 and 7974. _____

2. Take 796 from 1200. _____

3. Find the number that is 16 smaller than 400. _____

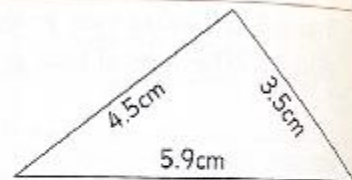
4. Find the cost of 15 football jerseys at €25 each. _____

5. Michael spent $1\frac{1}{2}$ hours at his homework last night.
He spent $\frac{2}{5}$ of that time doing mathematics.
How many minutes did he spend at mathematics? _____



6. By how much is 16.2 bigger than 9.75? _____

7. Find the length of the perimeter
of this triangle. _____



8. How many centimetres in 2m 70cm? _____

9. How many metres in $3\frac{1}{2}$ km? _____

10. Write 3m 96cm as metres in decimal form. _____

11. Change 8765 metres to kilometres and metres. _____

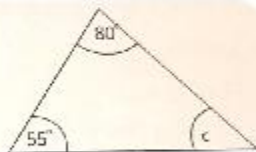
12. With your protractor,
measure the size of the angle
between the hands of this clock _____



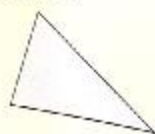
13. Draw an angle of 75° in this box.



14. Without using a protractor, find the measure of the angle marked C in this triangle. _____



15. Put a tick (✓) in the box beside the equilateral triangle.



16. Draw a diameter in this circle.



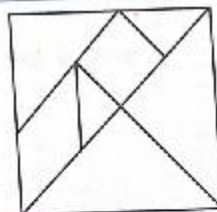
17. One of the factors of 12 is missing. Can you fill it in?

$12 = (1, 2, 3, 4, _, 12)$

18. All the prime numbers between 21 and 40, except one, are coloured in this part of the 100 square. Can you colour in the missing one?

21	22	23	24	25	26	27	28	29	30
31	32	33	34	35	36	37	38	39	40

19. Colour the quadrilaterals in this tangram.



20. Colour in the composite numbers on this strip.

16	17	18	19	20	21	22	23
----	----	----	----	----	----	----	----

Here are some nice activities to do at home!

Make a wordsearch	Make up a quiz	Make a marble run out of recyclable objects	Pair your socks	Build a tower of cards	Make your bed everyday
Build a fort	Do some colouring	Write a new ending for your favourite story	Compose a letter to a famous person you admire	Put on your favourite song & dance!	Cook/bake something you've never tried before
Spend time outside everyday	Do a mini project on your favourite country/animal	Play 20 questions	Design a new cover for your favourite book	Keep a diary	Read a story to your sibling/s
Do a jigsaw	Make a crossword	Try some sudoku	Fold and put away clothes	Help to make lunch or dinner	Tidy your bedroom!
Watch something on Cúla4/TG4	Paint some rocks	Read for at least 15 mins every day	Hide something & make a treasure map to find it	Play a board game	Make a collage out of leaves/magazines/newspaper